

# newman projection practice with answers

**Newman Projection Practice with Answers** is an essential topic for students and professionals in organic chemistry. This concept allows chemists to visualize the conformations of molecules along a specific bond, which is crucial for understanding their reactivity and interaction. In this article, we will explore the basics of Newman projections, how to draw them, and provide practice problems with solutions to enhance your comprehension.

## What is a Newman Projection?

A Newman projection is a way to represent the three-dimensional arrangement of atoms in a molecule as viewed along the axis of a particular bond. The projection simplifies the depiction of stereochemistry and helps chemists understand steric interactions between groups attached to the bonded carbon atoms.

In a Newman projection:

- The front carbon atom is represented by a point, while the back carbon atom is depicted as a circle.
- The groups attached to each carbon atom are drawn radiating out from these representations.

## Understanding the Importance of Newman Projections

Newman projections are crucial for several reasons:

1. **Conformational Analysis:** They allow chemists to analyze different conformations of a molecule, such as staggered and eclipsed forms.
2. **Predicting Stability:** By examining the steric interactions in various conformations, one can predict which conformations are more stable.

3. Visualizing Isomerism: Newman projections help in visualizing the spatial arrangement of substituents, particularly in the case of stereoisomers.

## How to Draw a Newman Projection

To draw a Newman projection, follow these steps:

1. Identify the Bond: Choose the bond you want to analyze.
2. Position the Front Carbon: Draw a dot to represent the front carbon atom.
3. Draw the Back Carbon: Draw a circle behind the dot for the back carbon atom.
4. Add Substituents: Attach the substituents to each carbon atom. The front carbon's substituents will radiate from the dot, while the back carbon's substituents will radiate from the circle.

## Types of Conformations

In Newman projections, there are two primary types of conformations to consider:

### 1. Staggered Conformation

In a staggered conformation, the substituents on the front carbon are positioned at a maximum distance from those on the back carbon. This arrangement minimizes steric hindrance and is usually more stable.

### 2. Eclipsed Conformation

In an eclipsed conformation, the substituents on the front carbon overlap with those on the back

carbon. This arrangement increases steric hindrance and is typically less stable.

## Practice Problems

To reinforce your understanding of Newman projections, here are some practice problems along with their solutions.

### Problem 1

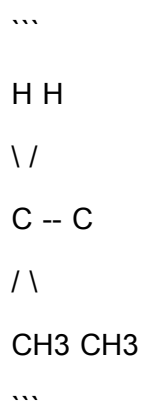
Draw the Newman projection for butane ( $C_4H_{10}$ ) along the  $C_2-C_3$  bond in both staggered and eclipsed conformations.

### Solution 1

1. Staggered Conformation:

- Front carbon ( $C_2$ ) has a methyl ( $CH_3$ ) group and two hydrogen ( $H$ ) atoms.
- Back carbon ( $C_3$ ) has a methyl ( $CH_3$ ) group and two hydrogen ( $H$ ) atoms.

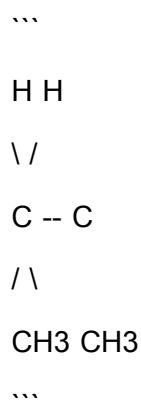
The structure will look like this:



## 2. Eclipsed Conformation:

- Position the methyl groups directly in front of each other and the hydrogen atoms overlapping.

The structure will look like this:



## Problem 2

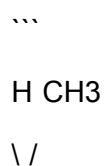
For 2-methylpropane ( $C_5H_{12}$ ), draw the Newman projection along the  $C_2$ – $C_3$  bond, showing both staggered and eclipsed conformations.

## Solution 2

### 1. Staggered Conformation:

- Front carbon ( $C_2$ ) has a methyl ( $CH_3$ ) group and a hydrogen ( $H$ ).
- Back carbon ( $C_3$ ) has two hydrogen ( $H$ ) atoms and another methyl ( $CH_3$ ) group.

The structure will look like this:



C -- C

/ \

CH<sub>3</sub> H

...

## 2. Eclipsed Conformation:

- Place the methyl group of C2 directly in front of the methyl group of C3, with hydrogen atoms overlapping.

The structure will look like this:

...

H CH<sub>3</sub>

\ /

C -- C

/ \

CH<sub>3</sub> H

...

## Additional Practice Exercises

Now that you have practiced with basic examples, try the following exercises:

1. Draw the Newman projection for 1-butanol along the C1–C2 bond.
2. Draw the Newman projection for hexane along the C3–C4 bond in both staggered and eclipsed conformations.
3. Identify whether the staggered conformation of 2,2-dimethylpropane is more stable than the

eclipsed conformation.

## Answers to Additional Practice Exercises

1. For 1-butanol: Draw the structure with the hydroxyl group (OH) on C1.
2. For hexane: Visualize the C3–C4 bond and place the substituents accordingly in both conformations.
3. The staggered conformation of 2,2-dimethylpropane is indeed more stable than the eclipsed conformation due to reduced steric hindrance.

## Conclusion

Newman projections are a powerful tool in organic chemistry that enhance our understanding of molecular conformations, stability, and reactivity. By practicing drawing these projections and analyzing different conformations, you will become proficient in visualizing and predicting molecular behavior. The practice problems and exercises provided in this article are designed to solidify your grasp of the concept. As you continue your studies, remember that practice is key to mastering Newman projections.

## Frequently Asked Questions

### What is a Newman projection and why is it used in organic chemistry?

A Newman projection is a way of visualizing the conformation of a molecule from a viewpoint along a carbon-carbon bond. It helps chemists understand the spatial arrangement of atoms and assess steric interactions and torsional strain.

## How do you draw a Newman projection for a given molecule?

To draw a Newman projection, first identify the bond you want to view. Represent the front carbon as a dot and the back carbon as a circle. Then, place the substituents around the front carbon dot and the back carbon circle according to their positions in three-dimensional space.

## What are the common conformations you can observe in a Newman projection?

The two common conformations observed are 'staggered' and 'eclipsed'. In a staggered conformation, the substituents on adjacent carbons are as far apart as possible, leading to lower energy. In an eclipsed conformation, substituents are aligned with each other, resulting in higher energy due to increased steric strain.

## How does steric hindrance affect the stability of different conformations in a Newman projection?

Steric hindrance occurs when atoms or groups of atoms are in close proximity, causing repulsive interactions. In a Newman projection, staggered conformations are generally more stable than eclipsed conformations because staggered arrangements minimize steric hindrance, leading to lower energy configurations.

## Can you explain how to identify the most stable conformation using a Newman projection?

To identify the most stable conformation, draw the Newman projections for all possible conformations of the molecule. Look for the staggered conformation with the largest groups positioned as far apart as possible. The conformation with the least steric strain and torsional strain will be the most stable.

# **Newman Projection Practice With Answers**

Find other PDF articles:

<https://nbapreview.theringer.com/archive-ga-23-51/pdf?ID=tjc93-7481&title=role-play-scenarios-for-anger-management.pdf>

Newman Projection Practice With Answers

Back to Home: <https://nbapreview.theringer.com>